

Name: \_\_\_\_\_

# Compare Numbers

Directions: Compare the two numbers in each box by writing  $>$ ,  $<$ , or  $=$ .

3,134

3,114

9,167

9,913

5,096

5,152

1,424

1,424

1,753

6,110

1,382

1,477

3,501

5,488

4,628

9,667

2,109

7,210

7,345

7,345

1,425

1,525

5,245

5,245

1,496

1,596

1,788

8,011

3,973

7,030




Name: \_\_\_\_\_

Date: \_\_\_\_\_


# Just the Facts!

## Directions


Write a multiplication fact that will help you solve each division equation.




$8 \div 4 = \underline{\quad}$




$10 \div 5 = \underline{\quad}$




$6 \div 6 = \underline{\quad}$




$9 \div 3 = \underline{\quad}$



$6 \div 2 = \underline{\quad}$




$4 \div 4 = \underline{\quad}$



$15 \div 5 = \underline{\quad}$



$24 \div 6 = \underline{\quad}$



$16 \div 4 = \underline{\quad}$